

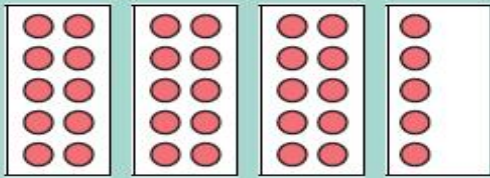
Extended Challenge 1

My team had more points than Billy's team and less than Ruby's.

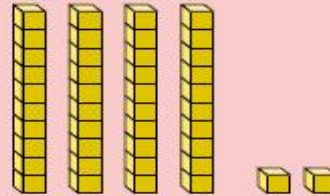


Gavin

Billy's team scored:



Ruby's team scored:



Write 2 different points Gavin's team could have scored:

points

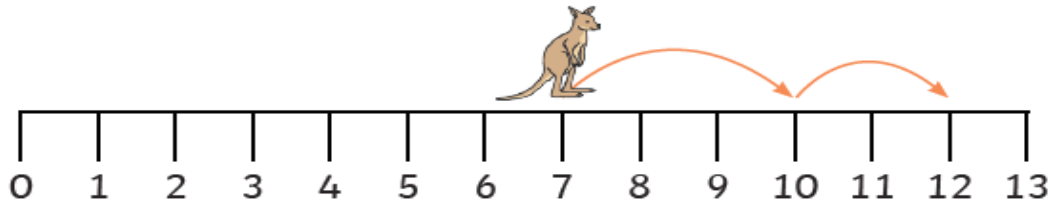
points

Show your 2 different points below, either using tens frames or base 10.

Extended Challenge 2

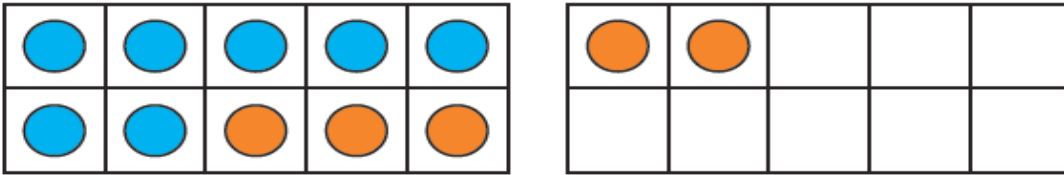
Kangaroo Fred starts on step 7 and wants to jump along 5 more.

First, he jumps 3 steps to 10. Then, he jumps 2 more steps.



$$7 + 5 = 12$$

He checked if he was correct using ten-frames.



Use the number track and tens frames below to find the answer to $8 + 4 = \underline{\quad}$

